

Name _____


Section _____

Date _____


Workbook Chapter 28, Exercise 1-B

B. Add the appropriate accidentals to create the modal scale indicated:


D-Mixolydian




B-Dorian




F-Phrygian



G-Aeolian



E-Lydian



G-Locrian

