


Name \_\_\_\_\_

Section \_\_\_\_\_

Date \_\_\_\_\_

### Workbook Chapter 1, Exercise 5-C


C. Notate the specified intervals above the given notes.



$\frac{P4}{1}$     $\frac{m3}{2}$     $\frac{m6}{3}$     $\frac{M2}{4}$     $\frac{P4}{5}$     $\frac{P5}{6}$     $\frac{m2}{7}$     $\frac{P5}{8}$     $\frac{M7}{9}$     $\frac{m7}{10}$




$\frac{M3}{11}$     $\frac{P8}{12}$     $\frac{M6}{13}$     $\frac{m7}{14}$     $\frac{M3}{15}$     $\frac{M7}{16}$     $\frac{P8}{17}$     $\frac{P5}{18}$     $\frac{M6}{19}$     $\frac{m2}{20}$



$\frac{m3}{21}$     $\frac{M2}{22}$     $\frac{M7}{23}$     $\frac{M3}{24}$     $\frac{M6}{25}$     $\frac{m7}{26}$     $\frac{P4}{27}$     $\frac{M7}{28}$     $\frac{M6}{29}$     $\frac{m2}{30}$



$\frac{M6}{31}$     $\frac{M3}{32}$     $\frac{m3}{33}$     $\frac{M3}{34}$     $\frac{P5}{35}$     $\frac{m2}{36}$     $\frac{m6}{37}$     $\frac{m7}{38}$     $\frac{M7}{39}$     $\frac{M2}{40}$



$\frac{m6}{41}$     $\frac{M2}{42}$     $\frac{P4}{43}$     $\frac{m3}{44}$     $\frac{m7}{45}$     $\frac{P5}{46}$     $\frac{m6}{47}$     $\frac{P5}{48}$     $\frac{M7}{49}$     $\frac{m2}{50}$



$\frac{P5}{51}$     $\frac{P4}{52}$     $\frac{m3}{53}$     $\frac{m7}{54}$     $\frac{M2}{55}$     $\frac{P4}{56}$     $\frac{M6}{57}$     $\frac{m6}{58}$     $\frac{m2}{59}$     $\frac{M3}{60}$